

ST. COLUMBUS SCHOOL

Dayal Bagh, Surajkund, Faridabad-121009 (Haryana)

ASSIGNMENT: UNIT TEST - I (2025-26)

SUBJECT- ENGLISH

DATE - _____

CLASS - V

NAME - _____

SECTION - _____

ROLL NO. - _____

Q1. Read the passage carefully and answer the given questions.

There are wild dogs and *pet* dogs. Pet dogs are helpers and friends to people. There were no pet dogs 15,000 years ago. Men and women learned how to work with dogs. Dogs helped humans travel from Asia to North America 10,000 years ago by *pulling* sleds in the snow. People say dogs are “man’s best friend.” They help with farming. They help with hunting. They help with fishing. They can pull things for people. They can help find things. There are many colors of dogs. There are white dogs, gray dogs, black dogs, and brown dogs. A dog’s *fur* can be short or long. Dogs have curly hair or *straight* fur. There are very small dogs. They are only 6-8 inches tall. There are very big dogs. They are about 3 feet tall. Some dogs can see well. Some dogs do not see very well. All dogs can hear well. They can hear sounds that people cannot hear. They can hear high sounds and low sounds. They can hear sound very far away. All dogs can smell very well. They can smell 40 times better than *humans*! Dogs live 5 to 13 years, but some dogs live much longer. One dog lived to be 24 years old!

a) How tall are the smallest dogs?

Ans. _____

b) What can all dogs do well?

Ans. _____

c) Fill in the blanks.

i) _____ dogs are helpers and friends to people.

ii) They can smell _____ times better than humans.

d) Find the opposite of the given word from the above passage.

i) shorter _____

SECTION-B (GRAMMAR)

Q2. Underline the nouns and write their types.

a) I have a bunch of keys.

b) John broke the pencil.

c) He works with honesty.

Q3. Change the genders of the given word.

a) lion- _____

b) monk- _____

b) gentleman- _____

c) uncle- _____

Q4. Write the plurals of the given words.

a) story- _____

b) life- _____

c) child- _____

d) ox- _____

Q5. Rewrite the expressions using 's or '.

a) the hostel of boys- _____

b) the pen of Meena- _____

c) the house of Mrs. Sharma- _____

Q6. Circle the subjects and underline the predicates in the following sentences.

a) The truck sirens were very loud.

b) Ankit is a very thoughtful person.

c) Grandma came to visit us.

Q7. Identify the sentences as assertive, interrogative, imperative or exclamatory.

a) Ouch! It hurt me. _____

b) How many people have you met these days? _____

c) David brought a new car. _____

Q8. Change the following sentences into negatives.

- a) You are clever. _____
- b) We were happy. _____
- c) She has a red pen. _____

Q9. Frame the interrogative sentences from the following sentences.

- a) It is raining. _____
- b) Amit was rude with you. _____
- c) They are busy. _____

SECTION -C (LITERATURE)

Q10. Write the meaning of each of the following words.

- a) tradition - _____
- b) burst - _____

Q11. Make sentences.

- a) martyr- _____
- b) garret- _____

Q12. Fill in the blanks.

- a) Rubina accepted the challenge without _____
- b) Russia has won _____ great wars in its history.
- c) Rubina courageously took the invisible _____.

Q 13. Who said the following words to whom?

- a) "Nobody move. You're about to see something marvelous."

- b) "Yes, I am an Indian."

ST. COLUMBUS SCHOOL

Dayal Bagh, Surajkund, Faridabad-121009 (Haryana)

ASSIGNMENT: UNIT TEST - I (2025-26)
SUBJECT- HINDI
CLASS – V

DATE –

NAME - _____

SECTION - _____

ROLL NO. - _____

खंड क 'पठन कौशल'

प्र०1) निम्नलिखित गद्यांश को पढ़कर दिए गए प्रश्नों के उत्तर लिखिए।

सूरज हमारी पृथ्वी का जीवनदाता है। उसकी किरणें पृथ्वी पर प्रकाश और ऊर्जा लेकर आती हैं। पौधे सूरज की रोशनी से भोजन बनाते हैं, जिसे हम और जानवर खाते हैं। सूरज के बिना न तो पेड़-पौधे जीवित रह सकते हैं और न ही मनुष्य।

सूरज केवल ऊर्जा ही नहीं देता, बल्कि समय का भी निर्धारण करता है। सुबह सूरज उगता है, दोपहर में सबसे ऊपर होता है और शाम को ढल जाता है। इसी के अनुसार हमारा दिन चलता है। प्राचीन समय में लोग सूरज को देवता मानकर उसकी पूजा करते थे। आज भी कई त्योहार, जैसे मकर संक्रांति और छठ पूजा, सूरज से जुड़े हुए हैं। हमें भी सूरज का सम्मान करना चाहिए और उसकी दी हुई ऊर्जा का सदुपयोग करना चाहिए।

(क) सूरज की किरणें पृथ्वी पर क्या लेकर आती हैं?

उ०—

.....

(ख) किन-किन त्योहारों में सूरज की पूजा की जाती है? गद्यांश के आधार पर उत्तर दीजिए।

उ०—

.....

(ग) प्राचीन समय में लोग सूरज को क्या मानकर पूजा करते थे?

उ०—

(घ) 'सदुपयोग' शब्द का विलोम शब्द लिखिए।

उ०—

खंड ख 'साहित्य'

प्र०2) निम्नलिखित शब्दों के अर्थ लिखिए।

(क) ओजस्वी (ख) आश्चर्य

(ग) उदर (घ) कालिख

प्र०3) निम्नलिखित प्रश्नों के उत्तर लिखिए।

(क) गुरु नानक देव की माता का नाम क्या था?

उ०—

(ख) रामदयाल दरबान 'काक' को क्या कहता था?

उ०—

प्र०4) किसने कहा, किससे कहा?

(क) "लल्ली, सास के घर जा रही है क्या?"

.....

(ख) "भोला झूठ बोलता है।"

.....

प्र०5) रिक्त स्थानों की पूर्ति कीजिए।

(क) नानक बचपन से ही विचारों के थे।

(ख) मिनी वर्ष की थी।

प्र०6) वाक्य बनाइए।

(क) दरबान

(ख) आदेश

खंड ग 'व्याकरण'

प्र०7) निम्नलिखित भाषाओं की लिपियों के नाम लिखिए।

(क) अंग्रेजी (ख) नेपाली

प्र०8) द्वित्व व्यंजन से दो-दो शब्द बनाइए।

त्त

च्च

प्र०9) निम्नलिखित शब्दों के तद्भव रूप लिखिए।

(क) पक्षी (ख) सत्य

प्र०10) निम्नलिखित शब्दों के विलोम शब्द लिखिए।

(क) मान (ख) मित्र

(ग) आयात (घ) आरंभ

ST. COLUMBUS SCHOOL

DayalBagh, Surajkund, Faridabad-121009 (Haryana)

ASSIGNMENT: UNIT TEST-I (2025-26)

SUBJECT- MATHEMATICS

DATE - _____

CLASS – V

NAME- _____

SECTION - _____

ROLL NO. - _____

Q1. Fill in the blanks.

- a) 1 million = _____ thousands
- b) 1 crore = _____ lakhs
- c) The numeral for two crore seven lakh fifty thousand nine is _____
- d) _____ can be subtracted from L and C only once.
- e) The place value of 6 in 347865317 is _____
- f) The sum of XXIV and XVII is _____
- g) _____ is the nearest tens of 66.

Q2. Put commas and write the number name according to Indian Place Value chart.

- a) 257843176 _____

Q3. Put the correct sign(= , > , <)

- a) XXVII _____ $50 + 3$
- b) $30 + 5 =$ _____ XXXV

Q4. Write the expanded form.

- a) 54,36,71,085 = _____
- b) 930,210,056 = _____

Q5. Round each of the following numbers to the nearest:

a) thousands

i) 6754 _____

b) 2165 _____

b) hundreds

i) 234 _____

ii) 765 _____

b) tens

i) 31 _____

ii) 89 _____

Q6. Using International Place Value Chart, write the number name of 75043005.

Q7. Write the place value of 7 in:

a) 7894301 _____

b) 46900700 _____

c) 56789231 _____

Q8. Write the Roman numeral of the given Hindu Arabic numeral.

a) 450 _____

b) 99 _____

c) 321 _____

d) 169 _____

Q9. Write the Hindu Arabic numeral of the given Roman numerals.

a) XLIV _____

b) DCCLIV _____

c) CLXIX _____

d) LXV _____

ST. COLUMBUS SCHOOL

Dayal Bagh, Surajkund, Faridabad-121009 (Haryana)

ASSIGNMENT: UNIT TEST - I (2025-26)

SUBJECT- SCIENCE

CLASS – V

DATE - _____

NAME - _____

SECTION - _____

ROLL NO. - _____

Q1. Fill in the blanks:

- a) The _____ are modified leaves.
- b) The smallest seed in the world come from tropical _____.
- c) When a seed sleeps, it is called _____.
- d) The food in _____ stored in dry conditions.
- e) A stalk arises from the ovary is called _____.

Q2. Write one example for each of the following:

- a) Monocotyledonous seeds _____
- b) Seeds dispersed by animal _____
- c) Seeds dispersed by Explosion _____
- d) Runners _____

Q3. Answer in one word:

- a) The seeds that have two seed leaves - _____
- b) The seed which has hook like structure - _____
- c) The seed has wing like structure - _____

Q4. Why farmer sow seeds in proper gap in the field?

Ans: _____

Q5. Seeds do not germinate when they are kept in an ice-box or refrigerator. Why?

Ans: _____

Q6. Observe the plant and answer the following:



a) How does the above plant reproduce?

Ans: _____

b) Name any other plant that uses the same mode to reproduce?

Ans: _____

Q7. Draw the diagram of structure of seed.

ST. COLUMBUS SCHOOL

Dayal Bagh, Surajkund, Faridabad-121009 (Haryana)

ASSIGNMENT: UNIT TEST-1 (2025-26)

SUBJECT- SOCIAL SCIENCE

CLASS – IV

DATE - _____

NAME- _____

SECTION - _____

ROLL NO. - _____

Q1. Fill in the blanks.

- a. A _____ is the representation of earth on flat surface.
- b. _____ claimed that the earth was round.
- c. The oldest known globe was made more than _____ years ago.
- d. _____ is known as the Dark Continent.

Q2. Give one word answer.

- a. The continent that has five time zones _____
- b. Imaginary circles drawn from east to west _____
- c. The colour used to show water bodies in map _____
- d. Continent with no permanent habitation _____

Q3. Define.

- a. intermediate directions- _____
- b. circumference- _____

Q5. Answer the following questions.

- a. Why Australia is called 'island continent'?

b. What are meridians? How many meridians are there?

Q6. Draw neat and well labelled diagram of "important parallels".

ST. COLUMBUS SCHOOL

Dayal Bagh, Surajkund, Faridabad-121009 (Haryana)

ASSIGNMENT: UNIT TEST I (2025-26)

SUBJECT- COMPUTER

DATE - _____

CLASS – V

NAME - _____

SECTION - _____

ROLL NO. - _____

Q1. Guess who am i?

- a) A set of data arranged in rows and columns.
- b) Two tabs appear under SmartArt tools contextual tab.
- c) Vertical series of cells in a table.
- d) Horizontal series of cells in a table.
- e) Username and domain name is separated by this sign.
- f) To use an email account, I must do with my email username and password.

Q2. Write the full forms of the following:

- a) Cc - _____
- b) WWW - _____
- c) URL- _____





Q3. Define emoticons.

Ans- _____

Q4. Write the correct component of an email in the following.

- a) It stores the mails sent by you.
- b) It shows the list of received mails.
- c) It stores the mails that you have started to write but not sent to anyone.
- d) It stores the deleted mails.
- e) It is a short title that given to a mail.

Q5. Identify the icons given below:

Icons	Name the icons	Icons	Name the icons
i. 		iv. 	
iii. 		vi. 	

ST. COLUMBUS SCHOOL

Dayal Bagh, Surajkund, Faridabad-121009 (Haryana)

ASSIGNMENT: UT-1 (2025-26)
SUBJECT- GENERAL KNOWLEDGE

DATE - _____

CLASS – V

NAME - _____

SECTION - _____

ROLL NO. - _____

QI. Fill in the blanks:

1. A country surrounded by water on three sides is called a _____.
2. Chandrayaan-3 mission comprises of a lander named _____ and a rover named _____.
3. _____ launched Tata Nano, the world's cheapest car.
4. _____ railway station is a designated UNESCO World Heritage Site
5. _____ is also called as "the Bird's Nest".
6. India's first woman IPS officer is _____.
7. _____ became the women's singles national badminton champion at the age of 16.

QII. Answer the following question in one word-

1. Who was the first woman pilot of the Indian Navy?

2. Where is the Haveli of Agha Khan situated?

3. Which is the longest river bridge of India?

4. Name the second tallest statue in the world.

5. Name the third-largest Gaint Sequoia Tree in the world in Sequoia National Park.

QIII. Correct the following underlined incorrect words.

1. Colosseum was built by Shah Jahan.

2. Indian Ocean is the deepest ocean.

3. Kempegowda International Airport is at Mumbai.

4. Statue of Liberty is the world's tallest statue.

5. Stapes bone is the largest bone in human body.
