

ST. COLUMBUS SCHOOL

Dayal Bagh, Surajkund, Faridabad-121009 (Haryana)

ASSIGNMENT: UNIT TEST - I (2026-27)

SUBJECT – ENGLISH

CLASS-III

DATE-

NAME- _____ SECTION- _____ ROLL NO. _____

SECTION-A (READING SKILLS)

Q1. Read the passage carefully and answer the following questions:

Last Sunday, Meena and her family went for a picnic near a river. The weather was pleasant and the sky was clear. They packed delicious food like sandwiches, fruits and juice. When they reached the spot, Meena spread a mat under a big tree. Her parents relaxed while she played with her brother.

Soon, they heard birds chirping and saw colorful butterflies flying around. Meena decided to explore the area. She found smooth stones near the river and collected a few. Her brother joined her and they both started skipping stones across the water.

After some time, they all sat together and enjoyed their lunch. Suddenly, dark clouds appeared and it started to rain lightly. Instead of getting upset, the family laughed and enjoyed the cool rain. They quickly packed their things and returned home safely.

It was a fun and memorable day for Meena and her family. She learned that spending time with family in nature brings happiness and joy.

a) Where did Meera and her family go?

Ans: _____

b) Fill in the blanks.

i) They packed _____ food.

ii) They quickly _____ their things and returned home safely.

c) Choose the opposite of the word 'far' from the above passage. _____.

b) Your best friend cheated in an exam. Will you inform you teacher and why?

SECTION- C (GRAMMAR)

Q3. Underline the common nouns and circle the proper nouns.

- a) Sita is reading a book in the library.
- b) The river Yamuna flows through Delhi.
- c) Ramesh has a pet dog named Tommy.
- d) We visited the Taj Mahal last year.

Q4. Change the singular nouns into plural.

- | | | | |
|----------|-------|---------|-------|
| a) bush | _____ | d) box | _____ |
| b) child | _____ | e) leaf | _____ |
| c) baby | _____ | f) toy | _____ |

Q5. Write the opposite gender of the given words.

- | | | | |
|----------|-------|----------|-------|
| a) king | _____ | d) boy | _____ |
| b) uncle | _____ | e) lion | _____ |
| c) lady | _____ | g) horse | _____ |

Q6. Fill in the blanks with suitable nouns.

- a) The _____ is shining brightly in the sky.
- b) My _____ is cooking food in the kitchen.
- c) The _____ is barking at the stranger.
- d) We saw a beautiful _____ in the garden.
- e) The _____ are flying high in the sky.

SECTION- C (LITERATURE)

Q7. Write the meanings of the following words:

- a) countryside _____
- b) crisp _____
- c) wit _____
- d) eagerly _____

Q8. Make sentences:

- a) riddle _____
- b) gently _____
- c) promise _____

Q9. Fill in the blanks :

- a) The king found the _____ very interesting.
- b) The _____ saw the king's face on the gold coins.
- c) _____ went to the bookstore with his mother.
- d) Harish had one bad habit of _____ the pages.

Q10. Who said these words and to whom?

- a) "Why don't you check properly?" _____
- b) "I will take good care of my book." _____
- c) "Keep this riddle a secret." _____
- d) "I had seen your face a hundred times." _____

Q11. What did the minister give to the peasant?

Ans: _____

ST. COLUMBUS SCHOOL

Dayal Bagh, Surajkund, Faridabad-121009 (Haryana)

ASSIGNMENT: UNIT TEST -I (2026 -27)

SUBJECT- MATHEMATICS

CLASS - III

DATE - _____

NAME - _____

SECTION - _____

ROLL NO. - _____

Q1. Fill in the blanks:

a) The face value of 9 in 6798 is _____.

b) 38 is written as _____ in Roman numeral.

c) 560 more than 5689 = _____

d) 834 less than 6716 = _____

Q2. Round off 5670 to the nearest hundreds.

Q3. Write the successor and predecessor of 4892.

Successor _____

Predecessor _____

Q4. Write the numeral for the following:

a) Sixty thousand eight hundred and one. _____

b) Nine thousand _____

Q5. Solve the following:

a) $5672 + 456 + 63$

b) $4500 - 325$

_____	_____
_____	_____
_____	_____
_____	_____

Q6. Write the following in Hindu - Arabic numerals

a) XXII _____

b) XLV _____

Q7. Form the greatest and smallest 4- digit number using the digits 7, 8, 0 and 5.

Q8. Write the sum of the place value and face value of 5 in the number 6758.

Q9. Rohan collected 1,245 stamps and his friend Aman collected 2,130 stamps for a school exhibition. How many stamps did they collect altogether?

Q10. Read the Assertion- Reason statements and choose the correct option.

- i) Assertion (A): 7,890 is the predecessor of 7,891.
Reason (R): Predecessor means 1 more than the given number.
- a) Both A and R are true, and R is the correct explanation of A.
b) Both A and R are true, but R is not the correct explanation of A.
c) A is true, but R is false.
d) A is false, but R is true.

CASE STUDY

Q11. Reena and her father own a toy shop in a city. During the festival season, many children visited the shop to buy toys. In the first week, the shop sold 2345 toys. In the second week, the shop sold 1678 toys. The shopkeeper was very happy because many customers came to his shop.

a) How many toys were sold in the first week?

b) How many toys sold in the second week?

c) Write the difference between the toys sold in both weeks.

d) How many toys were sold in total? Write it in words also.

e) Write the difference between the toys sold in both weeks.

f) Round off the sale of first week to the nearest 100.

g) Write the successor and predecessor of the total toys sold.

ST. COLUMBUS SCHOOL

DayalBagh, Surajkund, Faridabad-121009 (Haryana)

ASSIGNMENT: UNIT TEST - I (2026-27)

SUBJECT- EVS

CLASS – III

DATE - _____

NAME-_____

SECTION - _____

ROLL NO. - _____

Q1. Fill in the blanks.

- a. _____ are the things that are provided to us by nature.
- b. Trees have strong woody stem called a _____.
- c. _____ are small, soft and fluffy feathers that keep the bird warm.

Q2. Give answer in one word.

- a. Fish moves with the help of- _____
- b. The series of stages from birth to adulthood- _____

Q3. Give an example of each.

- a. Climber- _____
- b. Human-made thing- _____

Q4. Answer the following questions.

- a. What is the main function of leaves in a plant?

Ans. _____

b. What is down stroke movement?

Ans. _____

Q5. Draw a well labelled diagram of 'parts of a plant'.

CASE STUDY

Q6. Read the following passage and answer the questions.

Riya went to her grandmother's garden. She saw many plants like rose, mango, spinach and carrot. Her grandmother told her that plants have different parts such as roots, stem, leaves, flowers, fruits and seeds. Each part has a special function. Roots absorb water from the soil, stems support the plant and leaves prepare food for the plant.

a. Which part of plant absorbs water from the soil?

b. Name any two plants Riya saw in her grandmother's garden.

Q7. In the question given below there are two statements marked as Assertion (A) and Reason (R). Read the statement and choose the correct option.

Assertion (A): Birds have different types of beaks.

Reason (R): Different birds eat different kinds of food.

Options:

- a) Both A and R are true, and R is the correct explanation of A.
- b) Both A and R are true, but R is not the correct explanation of A.
- c) A is true, but R is false.
- d) A is false, but R is true.

ST. COLUMBUS SCHOOL

Dayal Bagh, Surajkund, Faridabad-121009 (Haryana)

ASSIGNMENT: UNIT TEST - I (2026-27)

SUBJECT- COMPUTER

DATE - _____

CLASS – III

NAME - _____

SECTION - _____

ROLL NO. - _____

Q1. Tick the correct option-

a) This is the world's first PC.

i) Altair

ii) Laptop

b) The speed of laser and inkjet printer is measured in _____.

i) PPM

ii) CPS

c) Which of the following device is the combination of input and output device?

i) monitor

ii) touch screen

d) This software manages overall working of a computer.

a) system software

ii) application software

Q2. Write the name of the device that helps to do the following tasks in the computer.

a) To play games - _____

b) To print information on a paper - _____

c) To listen to music - _____

d) To connect a computer to another computer - _____

Q3. How many types of printers are there? Name them.




Ans- There are _____ types of printers.

1. _____ printer

2. _____ printer

3. _____ printer

Q5. Circle the correct device name and also identify the device as input/output/storage device.

	a) Speakers b) Pen drive	Input Output Storage
	a) Scanner b) Monitor	Input Output Storage
	a) CD/DVD b) Keyboard	Input Output Storage

ST. COLUMBUS SCHOOL

Dayal Bagh, Surajkund, Faridabad-121009 (Haryana)

ASSIGNMENT: UNIT TEST-I (2026-27)

SUBJECT- GENERAL KNOWLEDGE

DATE- _____

CLASS – III

NAME- _____

SECTION - _____

ROLL NO. - _____

Q1. Give answer in one word.

- a) A sacred flower for Buddhists- _____
- b) The author of 'The Discovery of India'- _____
- c) The first man to go to space- _____
- d) The red liquid that is sent around the body by the heart- _____
- e) The first woman Prime Minister of India- _____

Q2. Fill in the blanks.

- a) _____ is used to decorate the house on birthday.
- b) _____ is the skill of maintaining balance while walking along a thin wire or rope.
- c) _____ is a floating aquatic plant that is known for its round shape.
- d) The longest river of India is _____.
- e) The author of 'The Jungle Book' is _____.

Q3. Answer the following questions.

- a) Name the language spoken in Punjab.

Ans. _____.

- b) How many continents and oceans are there in the world?

Ans. _____.

c) Name the famous landmark in Paris, France.

Ans. _____.

d) Name the highest mountain peak of India.

Ans. _____.

e) Name any two dance forms of India.

Ans. _____.

Q4. Match the following.

a) Smallest State

i) Bihu

b) Capital of Bihar

ii) Gujarat

c) Sides in a square

iii) Patna

d) Dance form of Assam

iv) Goa

e) Red Fort

v) 4 (four)

f) Statue of Unity

vi) Delhi

ST. COLUMBUS SCHOOL

Dayal Bagh, Surajkund, Faridabad-121009 (Haryana)

ASSIGNMENT: UNIT TEST - I (2026-27)

SUBJECT- HINDI

CLASS – III

DATE - _____

NAME - _____

SECTION - _____

ROLL NO. - _____

खण्ड क 'पठन कौशल'

प्र०1) निम्नलिखित गद्यांश को पढ़कर दिए गए प्रश्नों के उत्तर लिखिए।

मंगलपुर गाँव में सुरेश नाम का एक किसान रहता था। वह नेक और मेहनती था, परंतु गरीब था। वह दिन भर अपने खेतों में काम करता था, तब जाकर अपने परिवार का गुज़ारा चलाने के लिए धन कमा पाता था। सुरेश की पत्नी का नाम मीरा था। वह भी अपने पति की तरह मेहनती थी। उनके दो बच्चे थे। बेटी राधिका और बेटा सोनू। दोनों बच्चे बहुत आज्ञाकारी थे। वे पढ़ाई-लिखाई के साथ-साथ अपने माता-पिता की सहायता भी करते थे।

एक दिन सुरेश के दोस्त ने उसे एक बड़ा-सा आम दिया और कहा, "तुम इसे खा लेना।" लेकिन सुरेश ने वह आम अपनी पत्नी को दे दिया। सुरेश की पत्नी मीरा ने वह आम अपने बेटे सोनू को दिया और कहा, "बेटा, यह आम तुम खा लो।" लेकिन जैसे ही सोनू आम खाने लगा, उसे अपनी बहन राधिका की याद आ गई और उसने वह आम राधिका को दे दिया।

(क) सुरेश नाम का किसान किस गाँव में रहता था?

उ०

(ख) सुरेश की पत्नी का नाम क्या था?

उ०

(ग) मीरा ने वह आम किसको दे दिया?

उ०

(घ) परिवार में हम अपने माता-पिता की सहायता किस प्रकार कर सकते हैं? दो वाक्यों में लिखिए।

उ०

.....

खण्ड ख 'साहित्य'

प्र०2) निम्नलिखित शब्दों के अर्थ लिखिए।

(क) गहन (ख) उपचार

प्र०3) निम्नलिखित प्रश्नों के उत्तर लिखिए।

(क) किस वर्ष गंगा को राष्ट्रीय नदी घोषित किया गया?

उ०

(ख) अजय को किस में लथपथ देखकर मम्मी ने रोना शुरू कर दिया?

उ०

प्र०4) किसने कहा?

“आगे मत बढ़ो। बम में छिपी चिंगारी हो सकती है।”

उ०

प्र०5) रिक्त स्थानों की पूर्ति कीजिए।

(क) अजय ने बम जलाकर ऊपर रख दी।

(ख) गंगा नदी के पानी में बैक्टीरिया को मारने का अद्भुत है।

प्र०6) वाक्य बनाइए।

(क) माँ

(ख) बम

खण्ड ग 'व्याकरण'

प्र०7) निम्नलिखित भाषाओं की लिपियों के नाम लिखिए।

(क) पंजाबी (ख) हिंदी

प्र०8) दिए गए निरर्थक शब्दों से सार्थक शब्द बनाइए।

(क) टखमल (ख) काजग

प्र०9) निम्नलिखित संयुक्त व्यंजनों से एक-एक शब्द लिखिए।

(क) क्ष (ख) ज्ञ

प्र०10) निम्नलिखित शब्दों के पर्यायवाची शब्द लिखिए।

(क) आग (ख) आँख

